

SECONDARY SCHOOL ANNUAL EXAMINATION 2006
EDUCATIONAL ASSESSMENT UNIT- EDUCATION DIVISION

FORM 3

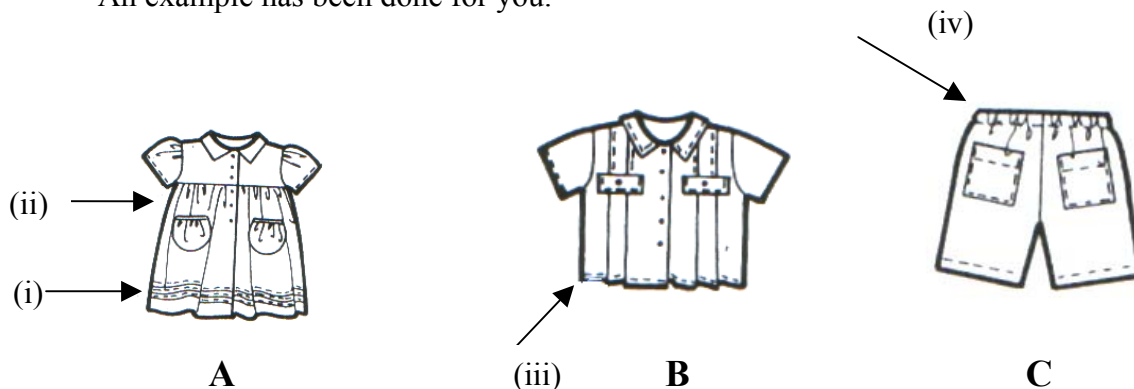
TEXTILES STUDIES

Time: 1h 30min

NAME: _____

CLASS: _____

- 1a. From the garments in the pictures, name: **three** ways of disposing of fullness.
An example has been done for you.



- (i) **Diagram A** – tucks on skirt.

(ii) _____

(iii) _____

(iv) _____

(3 marks)

- b. Choose **one** method of disposing of fullness. (question 1a)
Explain how it is worked.

Diagrams

Method

(i) _____

(ii) _____

(iii) _____

(iv) _____

(v) _____

(2, 5 marks)

- c. Using these diagrams, explain how this seam is worked.

Diagrams	Method
	(i) _____
	(ii) _____
	(iii) _____

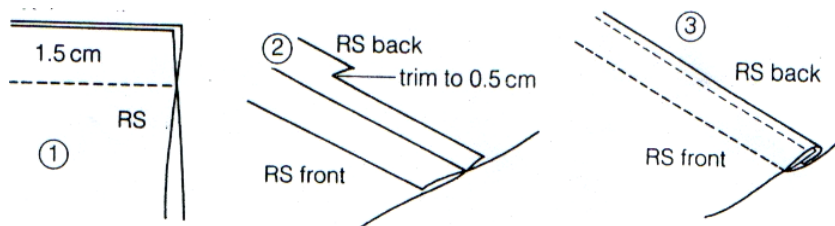
(3 marks)

- d. The diagram shows one way of neatening fabric. Name and draw **two** other ways of neatening.

three-step zig-zag

(2, 2 marks)

- e. (i) Name this seam: _____ (1 mark)



- (ii) Explain how this seam is worked.
1. _____
 2. _____
 3. _____

(2, 2, 2 marks)

(iii) Where would you use this seam?

(1 mark)

2a. Name the correct tool for carrying out the following tasks.

The first one has been done for you.

(i) cutting zig-zag edges

pinking shears_____

(ii) measuring fabric

(iii) marking fabric

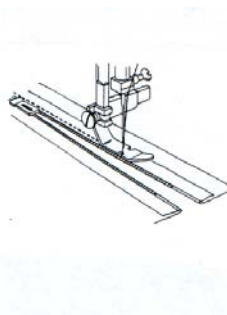
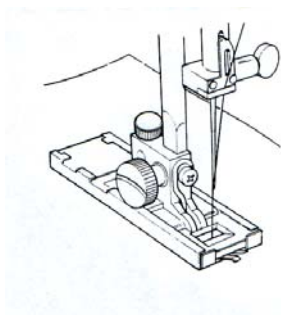
(iv) opening buttonholes

(v) protecting your finger

(vi) storing pins safely

(5 marks)

b. Give the name of these sewing machine attachments.



(i) Name _____

(ii) Name _____

(2 marks)

c. Which part of the sewing machine:

(i) tightens or loosens the stitch?

tension d_____.

(ii) makes the stitch bigger or smaller?

stitch l_____ regulator.

(iii) holds material in place?


presser f_____.

(iv) winds the bobbin?

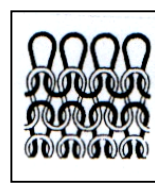
bobbin w_____.

(4 marks)

3a. Name these methods of fabric construction.



Name: W _____



Name: K _____
(2 marks)

b. List these properties under their right name.

ladders, frays, does not fray, firm, stretches

W _____

K _____

(i) _____

(i) _____

(ii) _____

(ii) _____

(iii) _____

(2, 3 marks)

4a. This year, scarves are very fashionable.
Describe how you would wash and dry a woollen scarf.

(i) _____

(ii) _____

(iii) _____

(iv) _____

(4 marks)

b. Draw **one** fashionable scarf.




(1 mark)

- c. Name and draw a garment which is fashionable this year

Name: _____

Draw:



(1, 1 mark)

- d. Name **two** fashion designers.

(i) _____

(ii) _____

(2 marks)

- 5a. Describe how to carry out a flammability (burning) test by completing these sentences with the following words: clip, fabric, pieces, burn, seconds.
Draw a diagram to help you.

**Burning Test
Diagram**

Method (complete)

- (i) Attach _____ of fabric
to metal rod with a _____ .
- (ii) Light the _____ by
holding the taper flame next to it
for two _____ .
- (iii) Watch what happens and write
down the time it takes to
_____ .

(2, 5 marks)

- b. Write **two** safety precautions to be observed when carrying out this test.

(i) _____

(ii) _____

(2 marks)

c. Wool does not burn easily.

Name **two** other advantages of wool.

(i) _____

(ii) _____ (2 marks)

d. Name **two** disadvantages of wool.

_____ (2 marks)

e. How can you recycle an old pair of jeans / trousers, blouse or other garment; when it is no longer fashionable?

Draw diagrams to show changes you have made.

Old Garment



New Garment



(2, 2 marks)

6a. Name **two** ways of colouring fabrics.

(i) Tie _____

(ii) B _____ .

(2 marks)

- b. Explain how you can colour a T. shirt using **one** of these methods.

Method

- (i) _____
- (ii) _____
- (iii) _____
- (iv) _____
- (v) _____ (5 marks)

- c. Name **two** fabrics that can be dyed (coloured) easily.

- (i) _____ (ii) _____
- (2 marks)

- d. Sandra bought a new top. After washing it once, the top's colour ran (the colour came out with other clothes). Sandra had washed it according to the care label.

What should Sandra do to protect her rights as a consumer?

- (i) _____
- (ii) _____
- (iii) _____ (3 marks)

- e. Why does a care label sometimes say:

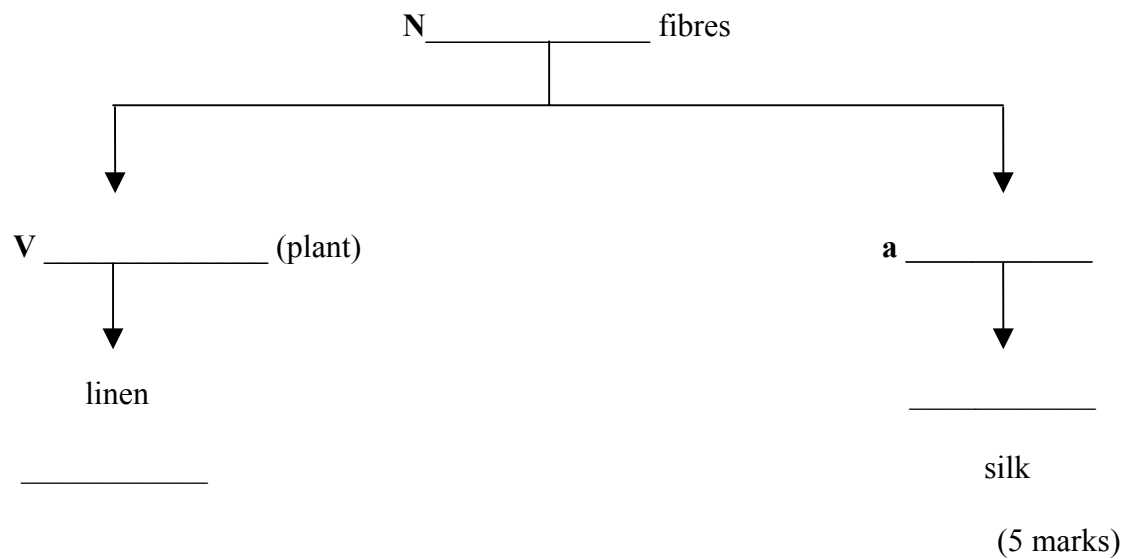
- (i) wash dark colours separately?

- (ii) do not tumble dry?

- (iii) do not bleach?

(1, 1, 1 mark)

7a. **Complete**



- (i) Linen is a _____ fibre.
- (ii) Silk is very _____ .
- (iii) _____ comes from sheep.
- (iv) _____ is used to make T. shirts.
- (v) Silk and _____ do not crease.
- (5 marks)

b. Name a fabric suitable for these items. Give a reason for your choice.

- (i) Summer dress

Fabric _____

Reason _____

(1, 2 marks)

- (ii) Oven Gloves

Fabric _____

Reason

(1, 2 marks)