

SECONDARY SCHOOL ANNUAL EXAMINATIONS 2006

Educational Assessment Unit - Education Division

FORM 2

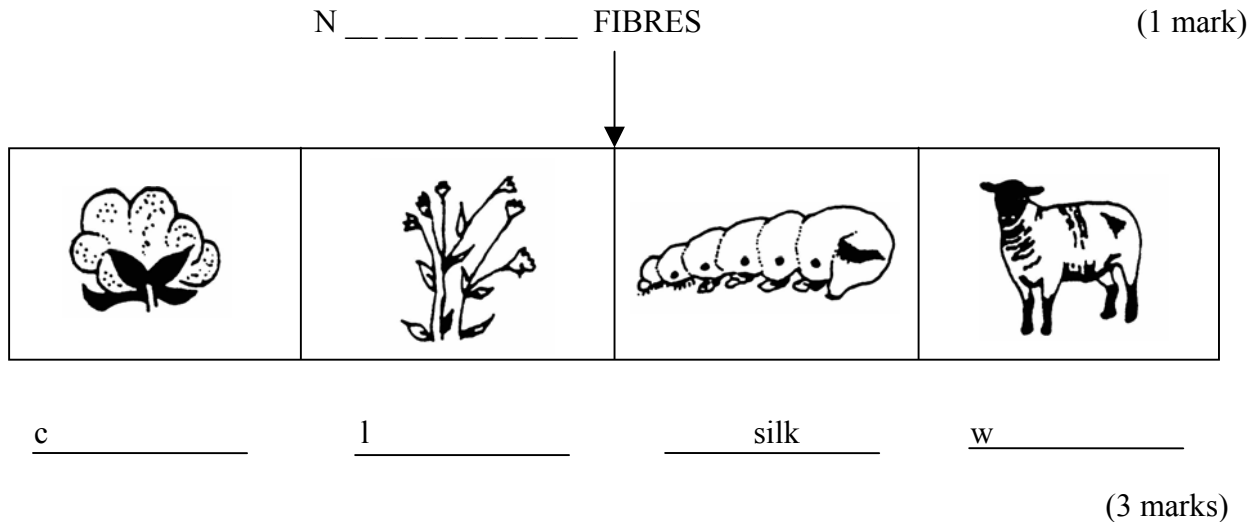
TEXTILES STUDIES

TIME: 1h 30min

Name: _____

Class: _____

1a. Complete this diagram




b. The two plant fibres are (i) _____ (ii) _____ (2 marks)


c. Which fibre:

(i) is the cheapest to buy?	_____
(ii) is warm to wear in winter?	_____
(iii) is cool to wear?	_____
(iv) is shiny?	_____
(v) is very absorbent?	_____

(5 marks)

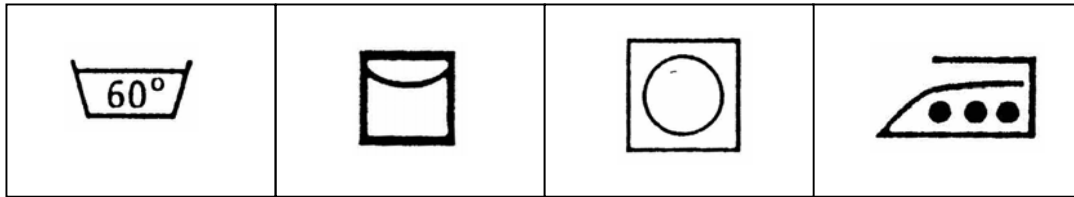
d. Name these labels





(2 marks)

- e. A towel had these care label symbols on it. Give the meaning of each symbol.



(4 marks)

- f. Jeans are made from denim fabric which is made from _____. (1 mark)

- g. Explain how to wash, dry and iron a pair of denim jeans.

(i) _____

(ii) _____

(iii) _____

(iv) _____

(v) _____

(5 marks)

- 2a. Complete this paragraph, using these words.

weft two fabric warp twill

Weaving is a method of making _____. In weaving we find _____ sets of yarns, the _____ threads (vertical), and the _____ threads (horizontal). Denim is woven with a _____ weave. (5 marks)

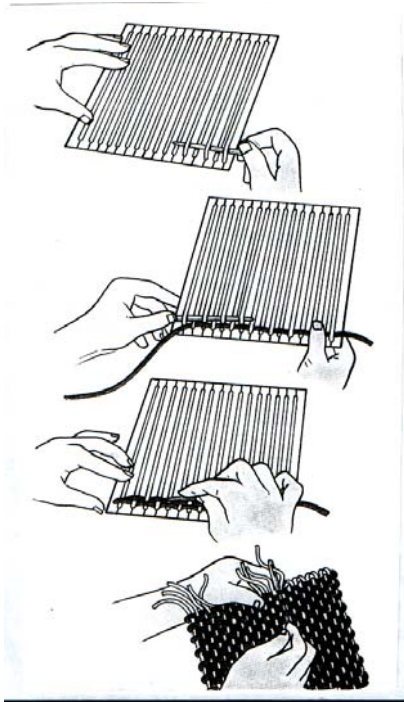
- b. Name **two** items made with weaving
eg. - a purse

(i) _____

(ii) _____

(2 marks)

- c. Using these diagrams, explain how to make a small purse with weaving.



(i) Cut a piece of card or wood into a square or rectangle.

(ii) _____

(iii) _____

(iv) _____

(v) _____

(4 marks)

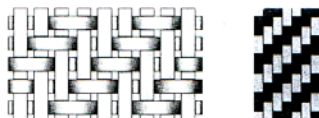
- d. List the materials needed to make this purse.

(i) _____

(ii) _____

(2 marks)

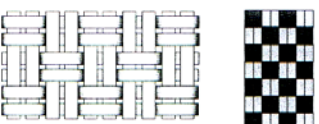
- e. Name these **three** types of weaves.



(i) _____



(ii) _____



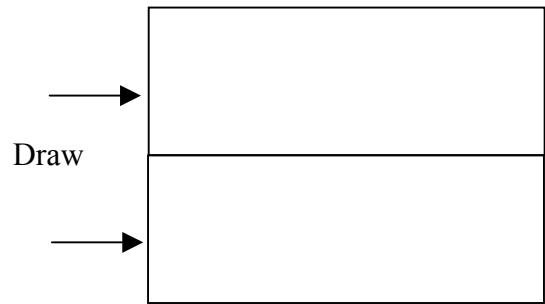
(iii) _____

(3 marks)

- 3a. Machine stitching is a permanent stitch.
Name and draw **two** other permanent stitches.

Name (i) _____

Name (ii) _____



(2, 2 marks)

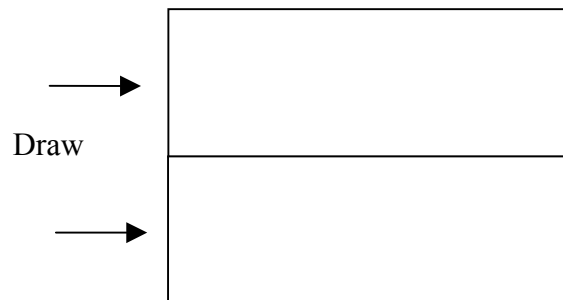
- b. Tacking stitches are t _____ stitches.

(1 mark)

- c. Name and draw **two** tacking stitches

Name (i) _____

Name (ii) _____



(2, 2 marks)

- 4a. Name and draw the skirt you made at school.
Draw front and back views.

Front

Back

(2 marks)

b. Draw a top and **two** accessories you can wear with this skirt.


Top

Front **Back**

(2 marks)

Accessories

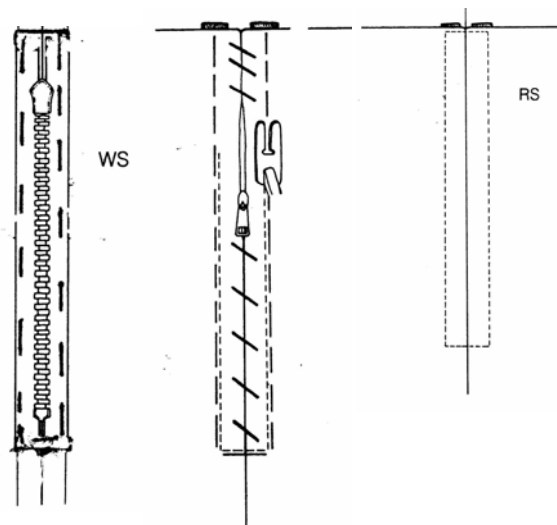
(i)



(ii)

(2 marks)

c. With the help of these diagrams, explain how to insert the zip at the back of the skirt.



- (i) _____
- (ii) _____
- (iii) _____
- (iv) _____
- (v) _____
- (vi) _____

(6 marks)

- d. Explain how to put up the hem of the skirt.

Draw a diagram to help you.

Name of hem _____

(1 mark)

Diagram

(i) _____

(ii) _____

(iii) _____

(iv) _____

(v) _____

(2, 5 marks)

- e. Name three types of fasteners.

(i) _____ (ii) _____ (iii) _____

(3 marks)

- 5a. Name **four** cutting tools and **two** measuring tools. Give the use of each tool.

Cutting tools

Use

(i) _____

(ii) _____

(iii) _____

(iv) _____

(4, 4 marks)

Measuring Tools

Use

(i) _____

(ii) _____

(2, 2 marks)

b. State the use of these parts of the sewing machine.

- (i) thread holder _____
- (ii) bobbin winder _____
- (iii) reverse button _____
- (iv) thread guides _____
- (v) thread take-up lever _____

(5 marks)

c. Make a list of **five** important features a new sewing machine should have.

- (i) _____
- (ii) _____
- (iii) _____
- (iv) _____
- (v) _____

(5 marks)

d. Write down **four** rules about the care of a sewing machine.

- (i) _____
- (ii) _____
- (iii) _____
- (iv) _____

(4 marks)

e. When a consumer buys a new sewing machine, what is the most important:

- (i) the price.
- (ii) the after sales service.
- (iii) the weight of the machine if it is portable?

Choose the most important. _____

Give a reason for your choice. _____

(1, 2 marks)