

SECONDARY SCHOOLS ANNUAL EXAMINATIONS 2000

Education Assessment Unit – Education Division

Information Technology

Form 1

Time: 1 hour

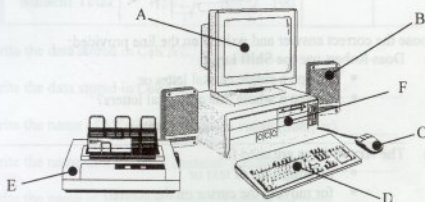
NAME:

CLASS:

1 Robert has bought a new computer system.

- (a) A diagram of the computer system is shown below.
Using the following words, fill in the list below to show the correct **device** near each letter. The last one (F) has been done for you.

speaker	printer	mouse
monitor	keyboard	(system unit)



- A _____
B _____
C _____
D _____
E _____
F _____ *system unit* _____

Marks

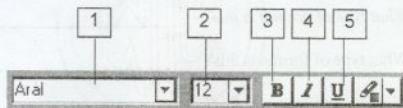
1
1
1
1
1

- (b) Robert would like to use the computer for his lessons. He wants to know if each device is INPUT or OUTPUT. Write INPUT or OUTPUT in the box near each device shown below:

keyboard speaker printer
mouse monitor

5

- 7 (a) The diagram below shows part of the Formatting Toolbar. Continue the sentences to explain what the items marked 1, 2, 3, 4 and 5 are used for in Word Processing.



1. This is used to change _____

2

2. This is used to change _____

2

3. This is used to make the text _____

2

4. This is used to make the text _____

2

5. This is used to make the text _____

2

- (b) Mary likes to use a Word Processing Program instead of a typewriter. Write down one advantage of using a Word Processing Program instead of a typewriter.

2

- 4 Joanne makes use of her computer at school for different purposes.

Marks



Choose one of the following to answer the questions below:

- a word processing program
- a spreadsheet program
- a drawing program.

- (a) Which application program does Joanne use for

- Writing a letter to her pen-friend? _____

1

- Drawing a cartoon? _____

1

- Automatically calculating the marks of an examination for a class of students? _____

1

- (b) Name a device which she uses to draw on the screen.

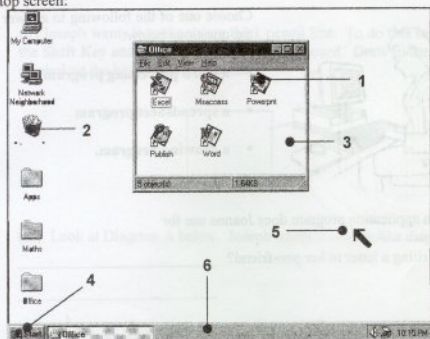
2

- (c) Name a device which could be used to print the letter to the pen-friend.

2

- 5 When Robert switches on his computer he sees the following Windows desktop screen:

Marks



Icon	Window	Recycle Bin
Mouse Pointer	Taskbar	Start Button

- (a) Look at the diagram above. From the list of words above, write the correct word near the number below. Number 3 has been done for you.

1. _____

1

2. _____

1

3. Window

4. _____

1

5. _____

1

6. _____

1

- (b) Here are three button names: **Maximize** **Minimize** **Close**.
Put the correct word in the box near each button.







3

- 6 (a) Mary uses her Word Processor to format text in different ways. Put the following words near the correct type of format:

Normal Bold Italic Underlined

What type of format is this? _____ 2

What type of format is this? _____ 2

What type of format is this? _____ 2


What type of format is this? _____ 2

- (b) Mary has already typed some text and she wants *one exactly like it in another place* in the document. Underline the correct answer to do this:

- Copy text and Paste it.
- Delete the text and type it again.
- Cut the text and Paste it.

3

- (c) Mary wants to save her document on a diskette. Put an X near the correct button to do this.



3

2 Read the following sentences and put an **X** in the **True** or **False** box.

	True	False	Marks
(a) Electricity wires and plugs must not be touched.	<input type="checkbox"/>	<input type="checkbox"/>	1
(b) Text in Headers and Footers appears on every page.	<input type="checkbox"/>	<input type="checkbox"/>	1
(c) First you Print and then Preview to see how it looks.	<input type="checkbox"/>	<input type="checkbox"/>	1
(d) The Numeric Key pad is used for typing many numbers.	<input type="checkbox"/>	<input type="checkbox"/>	1
(e) The Taskbar shows the programs in use at the moment.	<input type="checkbox"/>	<input type="checkbox"/>	1

3 Robert uses his computer for school work. He uses the keyboard to type text.


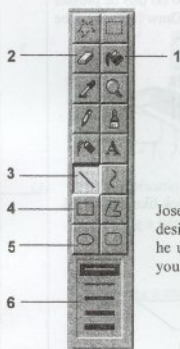


Choose the correct answer and write it on the line provided:

- (a) Does Robert use the **Shift** key
- to type a single capital letter or
 - to type a whole line of capital letters?
- _____ 2
- (b) The **Arrow** keys are used for
- deleting a lot of text or
 - for moving the cursor on the screen?
- _____ 2
- (c) The **Backspace** key is used to delete characters
- to the left or
 - to the right?
- _____ 2
- (d) The **Delete** key is used to erase characters
- to the left or
 - to the right?
- _____ 2
- (e) The **Spacebar** key is used for
- skipping a line
 - inserting a space between words?
- _____ 2

- 8 The diagram below shows a cartoon character designed by Joseph. He used a painting program on his computer.

(a)



Joseph used the toolbox shown here near the picture to design his cartoon. Write down the number of the tool he used to do the following (the first has been done for you):

- | | | |
|--------------------------------|--------------------------------|---|
| <input type="text" value="3"/> | to draw a line | |
| <input type="text"/> | to erase a part of the drawing | 1 |
| <input type="text"/> | to vary the line thickness | 1 |
| <input type="text"/> | to draw an ellipse | 1 |
| <input type="text"/> | to draw a rectangle | 1 |
| <input type="text"/> | to fill an area with colour | 1 |

- (b) (i) Look at the drawing Joseph has painted below. Draw beside it how it will look if he **flips** the drawing to the left or to the right.



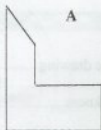
3

(ii) Joseph wants to make a very thick pencil line. To do this he presses the **Shift Key** and **another key** from the keyboard. Draw in the box the symbol on the key he needs to press.

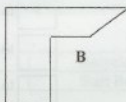
3



(iii) Look at Diagram A below. Joseph wants it to look like diagram B.



A



B

Underline the correct sentence to do this:

- He **draws** the diagram again.
- He **flips** the diagram.
- He **rotates** the diagram.

2

- 9 The table below is part of a spreadsheet. It shows the class marks of 3 students for Italian, History, Art and Biology. Answer the questions below.

Marks

	A	B	C	D	E	F
1	Class Marks	Italian	History	Art	Biology	Total
2	C. Calleja	40	30	50	50	170
3	D. Dimech	50	60	80	70	260
4	E. Ellul	60	70	60	80	
5						
6	Student Total	150	160	190		

- (a) Write the data stored in Cell A2. _____ 2
- Write the data stored in Cell C3. _____ 2
- Write the name of a Cell that contains a **value** (number). _____ 2
- Write the name of a Cell that contains a **label** (text). _____ 2
- Write the name of a Cell that should contain a **formula**. _____ 2
- (b) Underline the correct answer in the brackets:
- i) The marks for art are held in a (row, column). _____ 2
- ii) The students marks are held in a (row, column). _____ 2
- iii) A formula starts with (an equal sign, inverted commas). _____ 2
- iv) A spreadsheet is useful for (drawing, calculations). _____ 2
- (c) Give **one advantage** of using a spreadsheet on the computer over using a normal electronic calculator. _____ 3
- _____
- _____