

FOR OFFICIAL USE

--	--	--	--	--	--

C

0560/403

	KU	PS
Total Marks		

NATIONAL WEDNESDAY, 2 MAY
QUALIFICATIONS 10.35 AM – 12.20 PM
2007

COMPUTING STUDIES
STANDARD GRADE
Credit Level

Fill in these boxes and read what is printed below.

Full name of centre

Town

Forename(s)

Surname

Date of birth

Day Month Year

--	--	--	--	--	--

Scottish candidate number

--	--	--	--	--	--	--	--	--	--

Number of seat

Read each question carefully.

Attempt **all** questions.

Write your answers in the space provided on the question paper.





Write as neatly as possible.

Answer in sentences wherever possible.

Before leaving the examination room you must give this book to the invigilator. If you do not, you may lose all the marks for this paper.



1. Glencoe House is an outdoor centre that provides courses for a wide range of outdoor sports and activities. Details of the courses are found on the centre's website, part of which is shown below.

	<h3 style="text-align: center;">Rock Climbing</h3> <p>Rock Climbing is one of the most popular activities run by the centre. Click on the links below for more information.</p> <div style="display: flex; justify-content: space-around; align-items: center;">    </div>
-----------------------------------------------------------------------------------	----------------------------------------------------------------------------------------------------------------------------------------------------------------------------------------------------------------------------------------------------------------------------------------------------------------------------------------------------------------------------------------------------------------------------------------------------------------------------------------------------------------------------------

- (a) The web page on Rock Climbing includes a series of images as well as an audio voice-over. Some of the images have been *cropped*.

- (i) What happens to an image when it is cropped?

1
0

- (ii) State **one** method of *capturing images* for a web page.

1
0

- (iii) State **one** method of *capturing audio* for a web page.

1
0

2. When clients make a booking, Mirrah, the centre's secretary, enters their details in a database.

(a) Mirrah has poor eyesight. State **two** ways in which her computer's *HCI* could be customised to enable her to carry out this task effectively.

1 _____

2 _____

2
1
0

Part of the database design is shown below.

<u>Field Name</u>	<u>Type</u>	<u>Size</u>	<u>Validation</u>	<u>Sample Record</u>
Client Code	Number	4	>0 and <9999	1342
Surname	Text	20		Astley
Firstname	Text	20		Mike
Address	Text	30		34 Brampton Rd
Town	Text	20		Barnsley
Postcode	Text	8		YK3 7HJ
Sex	Text	6		Male
Date of Birth	Date	6		03/11/78
Course Name	Text	20		Orienteering

(b) A *validation* check is shown. Name the type of validation used.

1
0

(c) Describe the difference between *validation* and *verification*.

2
1
0

2. (continued)

- (d) The centre's database currently holds information concerning 15,000 clients.

Calculate how many **bytes** will be required to store **all** records. (Show your working.)

2
1
0

- (e) Mirrah wants to produce a paper copy of all females who have booked the mountain biking course.

- (i) Describe how this could be done.

4
3
2
1
0

- (ii) In this example, is Mirrah a *data subject*, *data controller* or *data user*?

1
0

- (iii) Describe **two** rights that a data subject has with the *Data Protection Act*.

1

2

2
1
0

- (f) Many databases make use of *computed fields*. What is a computed field?

1
0

[Turn over

(a) Derek's programs have to be translated into *machine code* before processing can take place. This can be done using either an *interpreter* or *compiler*.

(i) While developing the program: _____

Reason _____

(ii) When the program is finished: _____

Reason _____

(b) Derek always tries to make sure his software is *portable*. Explain why he does this.

3. (continued)

(c) Most of Derek's software is *commercial*. Some of it is *shareware*.

(i) What is shareware?

1	0
---	---

(ii) Why do you think Derek distributes his work as shareware?

1	0
---	---

(d) Some of Derek's customers download his software, while others receive their copies by post.

State **one** reason why Derek may prefer his customers to download his software.

1	0
---	---

(e) All of Derek's software includes *on-line help* and *on-line tutorial* facilities.

Which of these facilities should new customers use when they first receive the software? State **one** reason for your answer.

Facility _____

Reason _____

2	1
0	0

[Turn over

KU	PS
2 1 0	
	1 0
1 0	
	1 0
2 1 0	

4. Derek enjoys river kayaking in his spare time. He is keen to extend his skills and has enrolled on a course of sea kayaking at Glencoe House.

(a) A week before the course is due to begin, he receives a *standard letter* confirming his place on the course.

(i) What is a standard letter?

(ii) Apart from a word processor, what other application is usually involved in the creation of standard letters?

(iii) State the name of the process that inserts information from this application into the word processed document.

(b) On arrival at the centre, Derek is given a *magnetic stripe card* to access his accommodation. To enter his room, he must pass the card through a special piece of hardware.

What is this hardware called?

(c) Derek finds an *expert system* providing advice on activities, particularly useful.

Describe **two** advantages of using expert systems.

1

2

4. (continued)

(d) The centre has a *client-server* network.

(i) State **two** advantages for the centre of using a client-server network.

1 _____

2 _____

(ii) What piece of hardware will have to be installed in each computer to allow access to the client-server network?

(e) The centre is considering installing a *wireless* network. State **one** disadvantage of a wireless network in this situation.

(f) The manager of the centre used to travel to Glasgow to attend a meeting with other outdoor centre managers. They now use *video conferencing* instead.

(i) State **one** input device required to use video conferencing.

(ii) State **one** advantage to the managers of using video conferencing instead of attending their monthly meeting.

[Turn over]

-
- A black and white line drawing of a man in a kayak. He is wearing a helmet and a life vest. He is holding a paddle with both hands, and his mouth is open as if shouting or calling out. The kayak is pointed towards the bottom left of the frame.

- (i) What type of converter will be needed **before processing** of the information can take place? Tick (✓) **one** box only.

D to A converter	
------------------	--

A to D converter ☐

(ii) The program controlling the kayak is stored on *ROM*. State **two** advantages of storing software on ROM.

T **F** **T**

$$\begin{array}{ccc} 2 & & \\ 1 & & \\ 0 & & \\ & 1 & \\ & 0 & \\ & & 1 \\ & & 0 \end{array}$$

6. At the end of the course. Derek prepares to depart.

(a) During the activity, several black and white photographs were taken of Derek and the other clients. He wishes to take copies of them home using his *USB flash drive*.

- (i) He has only 3 Mb of storage space left on his flash drive. Each photograph measures 800×800 pixels. How many photographs can be stored on his flash drive?
(Show all working.)

3
2
1
0

- (ii) The *operating system* is involved in transferring the images from the computer to the flash drive. State **two** functions of an operating system.

2
1
0

(b) Derek pays for his course by *Electronic Funds Transfer (EFT)* using his *smart card*.

- (i) Describe **one** advantage of using a smart card.

1
0

- (ii) What are the main stages involved in EFT?

3
2
1
0

7. The centre uses a spreadsheet to keep track of its clients' accounts. Part of the spreadsheet is shown below.

	A	B	C	D	E
1	Name	Total Cost	Discount	Amount Paid	Money Due
2	Dino Mancini	520	52	300	168
3	Isla Sutherland	800	80	700	20
4	Sparky Douglas	280	0	200	80
5	Jack Valman	350	0	350	0

- (a) Cell C2 contains a *function* that determines any discount due to the client. If a client spends £500 or more on a course, then a discount of 10% is given, otherwise they receive no discount.

Part of the function is shown below. Complete the function.

= _____ (B2>=500, _____, 0)

- (b) This function has been replicated from cell C2 into cells C3 to C5. What type of reference has been used?

Type of reference _____

Explain your answer _____

- (c) At the end of each month, course directors receive a word processed report containing bar charts showing the number of clients completing their courses and the amount of money due. This information changes from month to month.

What type of linkage has taken place between the word processor and the spreadsheet applications?

Type of linkage _____

Explain your answer _____

[Turn over

(d) The client bookings database is a *multi-user* database. It is password protected in an attempt to prevent unauthorised access and hacking.

10

10

10

Explain your answer _____

10

Page fourteen

[BLANK PAGE]

[BLANK PAGE]