



Coimisiún na Scrúduithe Stáit
State Examinations Commission

Leaving Certificate Applied, 2013

Vocational Specialism
Craft and Design Course

Written Examination (40% of total marks)

Date : Thursday 13th June 2013

Afternoon: 2:00 - 3:30.

Write your **examination number** in this space →

Instructions

This paper contains eight questions.
Attempt any four questions.

For the Superintendent only	For the Examiner only		
<div>Centre Stamp</div>	Question 1		
	Question 2		
	Question 3		
	Question 4		
	Question 5		
	Question 6		
	Question 7		
	Question 8		
	Total		
	Minus total for disallowed questions		
	Grand Total		

Fashion and Textiles

Question 1 (40 marks)

Answer **(a)**, **(b)** and **(c)**.

(a) Discuss these images under the following headings: colour, texture, form and shape. Use sketches to help explain your answer.



Colour _____

Texture _____

Form and shape _____

(b) Instead of wool and yarn, list other materials or media you could use to create a coral reef? Give reasons for your choice.

(c) Make a sketch of your coral reef.



Fashion and Textiles

Question 2 (40 marks)

Answer **(a)**, **(b)** and **(c)**.

(a) List the materials and equipment you could use to create one of the following puppets?


1. Marionette puppet
2. Glove puppet
3. Rod puppet
4. Shadow puppet

Type of puppet:

Materials and equipment.


(b) Describe the steps you would follow to create a puppet. Use sketches to help explain your answer.

Step 1 _____



Step 2_____

Step 3_____




(c) List the materials you would choose to decorate a 'firefighter' puppet?
Give reasons for your choice.

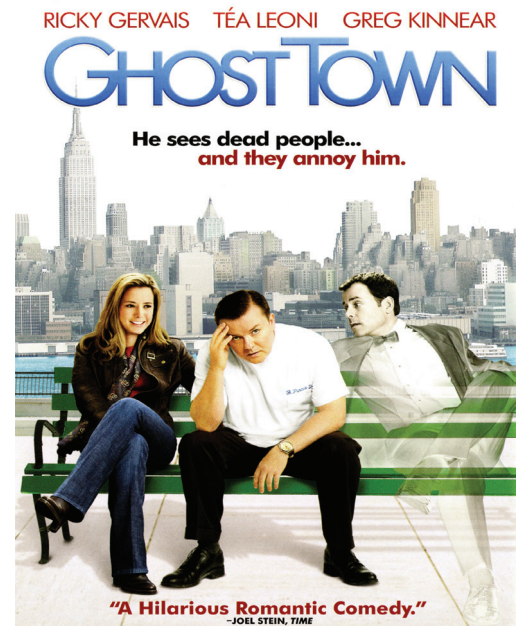
Graphic Communication and Print

Question 3 (40 marks)

Answer (a), (b) and (c).



1



2

(a) Compare these two film posters.

Use the following headings to help explain your answer:

Colour _____

Lettering _____

Images _____

(b) Create lettering for a horror film named **'Streets'**.

(c) Explain your choice of colour, lettering and style.

Graphic Communication and Print


Question 4 (40 marks)

Answer (a), (b) and (c).



- (a) The graffiti artist Banksy uses stencils to create quick images in public places. Stencils are used in many crafts. List the materials and equipment you would need to create a stencil.

- (b) Select one of the following images and use it as a starting point to create a stencil.



Prints by Escher



(c) Name a craft where this stencil could be used. Give a reason for your answer.

3-Dimensional Studies

Question 5 (40 marks)

Answer **(a)**, **(b)** and **(c)**.



(a) Study these images and say which you prefer.

My favourite is _____

Use the following headings to explain your choice:

Materials _____

Function _____

Shape _____

(b) Use these marine images to design a pendant.



(c) Describe your design using these headings:

Materials _____

Function _____

Shape _____

3-Dimensional Studies

Question 6 (40 marks)

Answer **(a)**, **(b)** and **(c)**.

- (a)** Design a ceramic money box based on the images below.
Give approximate measurements for your design.



- (b)** List the materials and equipment you would need to create your design in clay.

(c) Describe the steps you would follow to decorate and glaze your money box.
Use sketches to help explain your answer.

Step 1_____

Step 2_____

Step 3_____

Lens-based Studies

Question 7 (40 marks)

Answer **(a)**, **(b)** and **(c)**.

(a) Study these photographic effects. Describe the changes that have been made to the image.




The original picture





(b) Which image do you think is most successful? Give reasons for your answer.

(c) Name a photographic app that you have used. Describe the changes/effects you can create using the app. Use sketches to explain your answer.



Lens-based Studies

Question 8 (40 marks)

Answer **(a)**, **(b)** and **(c)**.

(a) Study the following photographs and suggest how they could be improved.

1. _____



2. _____



3. _____




(b) Explain **two** of the following photographic terms. Use sketches to help explain your answer:


panning, zooming, aperture or macro.

1. _____

2. _____



(c) Sketch a camera you have used and label the following parts: lens, flash.



BLANK PAGE

BLANK PAGE

BLANK PAGE