

OXFORD CAMBRIDGE AND RSA EXAMINATIONS

Tuesday 18 June 2019 – Morning

Level 3 Free Standing Mathematics

Qualification: Additional Mathematics

6993/01 Paper 1

Time allowed: 2 hours

plus your additional time allowance

YOU MAY USE:

a scientific or graphical calculator

Please write clearly in black ink.

Centre number

--	--	--	--	--

Candidate number

--	--	--	--

First name(s) _____

Last name _____

READ INSTRUCTIONS OVERLEAF



INSTRUCTIONS

Use black ink. HB pencil may be used for graphs and diagrams only.

Answer ALL the questions.

Read each question carefully before you start to write your answer.

Write your answer to each question in the space provided.

Where appropriate, your answer should be supported with working.

Additional paper may be used if necessary, but you must clearly show your candidate number, centre number and question number(s).

You are permitted to use a scientific or graphical calculator in this paper.

Final answers should be given to a degree of accuracy appropriate to the context.

INFORMATION

The total mark for this paper is 100.

The marks for each question or part question are shown in brackets [].

You are reminded of the need for clear presentation in your answers.

You are advised that an answer may receive NO MARKS unless you show sufficient detail of the working to indicate that a correct method is being used.

Formulae

FSMQ Additional Mathematics (6993)

Binomial series

When n is a positive integer

$$(a + b)^n = a^n + {}^nC_1 a^{n-1} b + {}^nC_2 a^{n-2} b^2 + \dots + {}^nC_r a^{n-r} b^r + \dots + b^n$$

$$\text{where } {}^nC_r = {}_nC_r = \binom{n}{r} = \frac{n!}{r!(n-r)!}, \quad r \leq n$$

The binomial distribution

$$\text{If } X \sim B(n, p) \text{ then } P(X = x) = \binom{n}{x} p^x (1-p)^{n-x}$$

Numerical methods

Trapezium rule:

$$\int_a^b y \, dx \approx \frac{1}{2} h \{ (y_0 + y_n) + 2(y_1 + y_2 + \dots + y_{n-1}) \},$$

$$\text{where } h = \frac{b-a}{n}$$

Answer ALL the questions.

- 1 A committee consists of five people. The roles of Chairman, Secretary and Treasurer are to be allocated at random from the committee with no one person taking more than one role.
In how many ways can this allocation of roles be made? [2]**

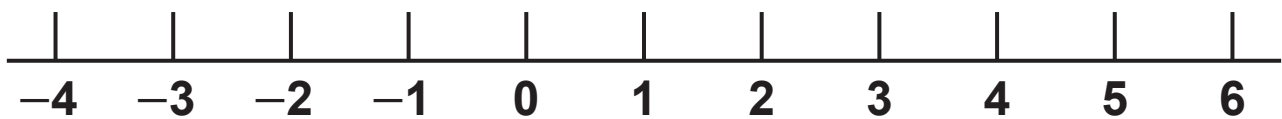
1 _____

2 (a) Solve the inequality $x^2 - x - 12 \leq 0$. [3]

(b) Illustrate your answer to part (a) on the number line provided. [2]

2 (a) _____

2 (b)



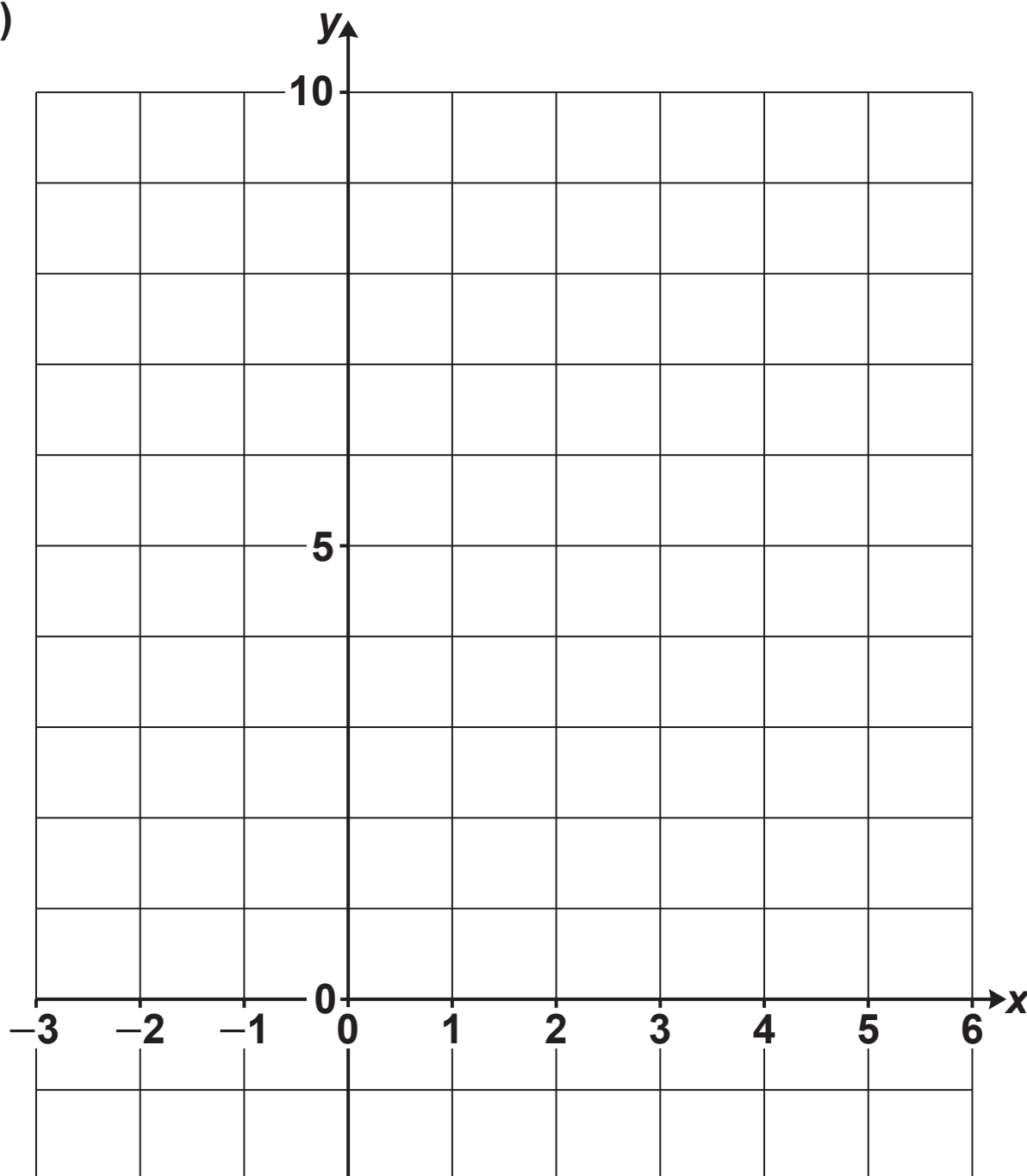
$y = x^3 - 2x^2 + 2x + 4$ at the point $(2, 8)$. [6]

[illegible]

4 (a) On the grid provided, sketch the curve $y = \frac{1}{5} \times 2^x$. [2]

(b) Solve algebraically the equation $\frac{1}{5} \times 2^x = 3$, giving your answer correct to 3 significant figures. [3]

4 (a)



There is a spare copy of this grid on page 37. If you wish to offer a second attempt then you must cross through the attempt on this grid that you wish to discard.

4 (b)

5 In this question you must show detailed reasoning.

Solve the equation $\log_{10}x + \log_{10}(x + 2) = 3\log_{10}2$. [5]

5

6 Angle θ is such that $\tan \theta = 1.5$.

**(a) Find the two values of θ in the range $0^\circ \leq \theta \leq 360^\circ$.
[2]**

(b) In this question you must show detailed reasoning.

Find the EXACT values of $\sin \theta$. [3]

6 (a) _____

[illegible]

7 In this question you must show detailed reasoning.

The equation $x^3 - 3x + k = 0$, where k is a constant, has a root $x = 2$.

Find the numerical value(s) of the other roots of this equation. [5]

7

[illegible]

- 8 Each of five students has a fair coin. They play a game in which each student tosses their coin and when the result of their toss is a head then that student is eliminated from the game. The game continues with the remaining students tossing their coin again. As before, any student who tosses a head is eliminated. The game continues until all the students have been eliminated or there is a single winner.**

Calculate the probability that

- (a) all students are eliminated after their first toss of the coin, [2]**
- (b) exactly two students are eliminated after their first toss and exactly two after their second toss, leaving one winner. [4]**

- 8 (a)** _____
- _____
- _____
- _____
- _____
- _____

8 (b)

9 The equation $x^3 + 2x^2 - x - 1 = 0$ has two negative roots, α and β , and one positive root, γ .

(a) By considering a change of sign, show that γ lies in the interval $[0, 1]$. [2]

(b) Show that $x = \sqrt{\frac{x+1}{x+2}}$ is a rearrangement of the equation. [2]

(c) Using the iterative formula $x_{r+1} = \sqrt{\frac{x_r + 1}{x_r + 2}}$ with $x_0 = 0.8$, find γ correct to 3 decimal places, showing the result of each iteration. [3]

9 (a) _____

9 (b) _____

[illegible]

10 You are given that the line $y = 2x + k$ cuts the circle $x^2 + y^2 = 5$ in two points, A and B.

(a) Show that the x -coordinates of A and B satisfy the equation

$$5x^2 + 4kx + (k^2 - 5) = 0. \text{ [2]}$$

(b) Hence find the values of k for which the line is a tangent to the circle. [2]

10 (a)

[illegible]

- 11 John makes wooden toys in his workshop at home. He classifies the toys as small or large. It takes 5 hours to make a small toy and 8 hours to make a large toy. He works for a maximum of 60 hours each week.**

Let x be the number of small toys and y be the number of large toys he makes each week.

- (a) Write down an inequality giving the time constraint. [1]**

John knows from experience that he needs to make at least 3 large toys each week,

also the number of large toys should be no more than double the number of small toys.

He never leaves any toys unfinished at the end of the week.

- (b) From this information, write down two more inequalities in x and y . [2]**

- (c) On the grid provided on page 24, illustrate these three inequalities.**

Shade the region that is NOT required. [4]

- (d) Find the maximum number of toys that John can make in a week and the number of hours he would take to make them. [2]**

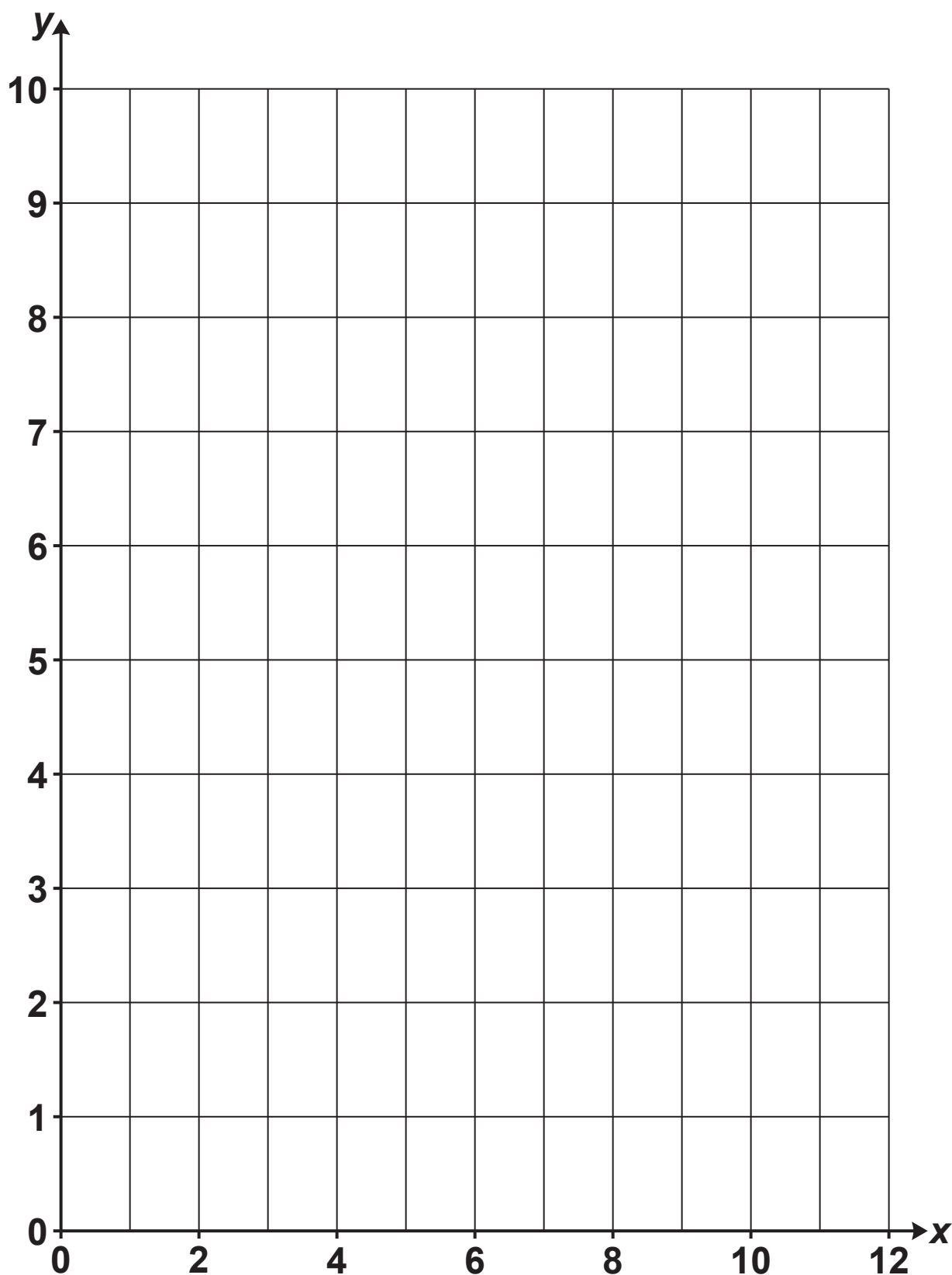
The price for which John sells his wooden toys is such that the profit made is £28 for each small toy and £60 for each large toy.

(e) Assuming that at the end of each week he sells all the toys, find the number of each type of toy he should make to maximise his profit and calculate the profit in this case. [3]

11 (a) _____

11 (b) _____

11 (c)



There is a spare copy of this grid on page 38. If you wish to offer a second attempt then you must cross through the attempt on this grid that you wish to discard.

11 (d)

11 (e)

12 The curve C_1 has equation $y = 10x - x^2 + k$ and passes through the point $(5, 10)$.

(a) Show that $k = -15$. [2]

(b) Show that there is a maximum value at the point $(5, 10)$. [3]

The curve C_2 with equation $y = (x - 3)^2$ has been plotted on the grid provided on page 28.

(c) On the same grid, sketch the curve C_1 . [2]

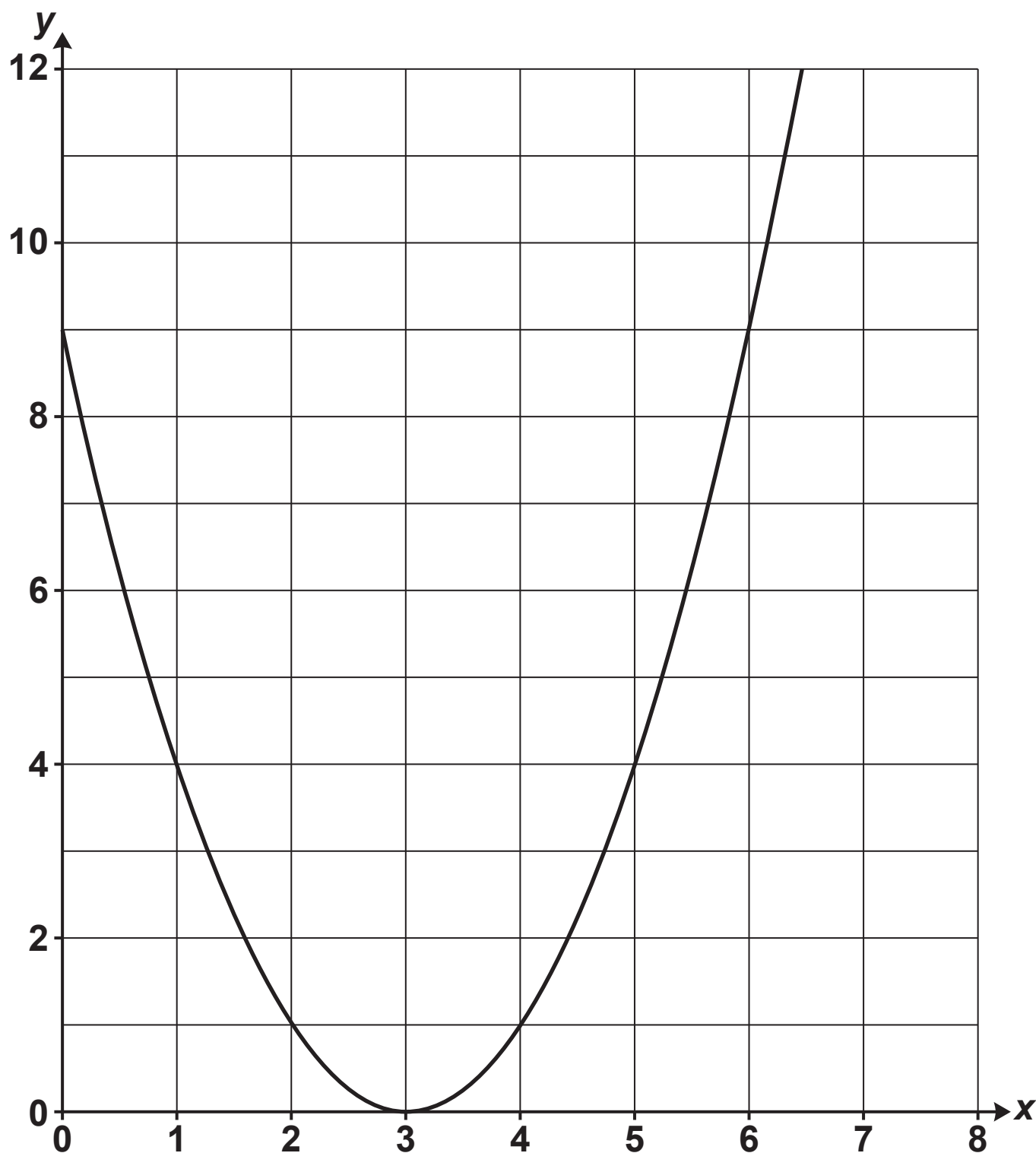
(d) Find the coordinates of the points of intersection of the curves C_1 and C_2 . [2]

(e) Find the area between the curves C_1 and C_2 . [5]

12 (a) _____

[illegible]

12 (c)

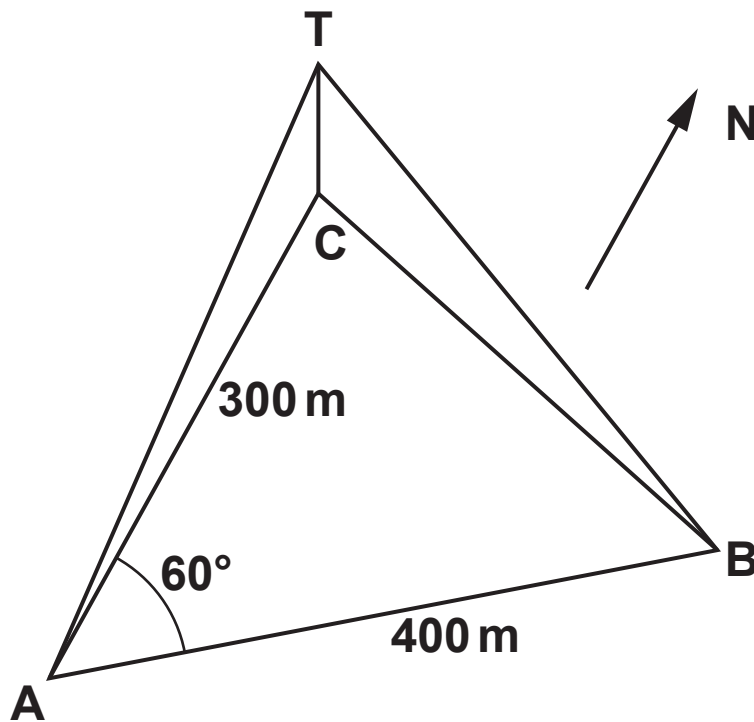


There is a spare copy of this graph on page 39. If you wish to offer a second attempt then you must cross through the attempt on this grid that you wish to discard.

12 (d) _____

12 (e) _____

- 13 A straight road runs on a bearing of 060° from a point A to a point B, 400 m from A.
A vertical mast, CT, stands at a point C, 300 m due north of A. From the point A the angle of elevation of the top of the mast, T, is 7° . The triangle ABC is on horizontal ground.



- (a) Find the height of the mast. [2]
(b) Find the angle of elevation of the top of the mast from point B. [5]
(c) Find the bearing of the base of the mast from point B. [5]

13 (a)

13 (b)

13 (c)

- 14** Speed bumps are designed to encourage drivers to drive slowly. On a particular road, the bumps put onto the road are designed to give minimum discomfort and damage at a speed of 9ms^{-1} .

Paul is driving along the road at a speed of 14ms^{-1} when he sees the warning sign, he is 50 m before the first bump. He immediately slows down with uniform deceleration so that when he reaches the first bump he is travelling at a speed of 9ms^{-1} .

- (a)** Calculate the uniform deceleration AND the time taken for Paul to reach the first bump. [3]

Immediately after the bump he accelerates such that at t seconds after leaving the bump his speed,

$v\text{ms}^{-1}$, is given by $v = \frac{1}{100}(15t^2 - t^3) + 9$.

- (b)** Show that he reaches his original speed of 14ms^{-1} in 10 seconds. [1]
- (c)** Find the distance travelled from the speed bump by the time he reaches this speed. [4]
- (d)** Find the maximum acceleration in this period. [3]
- (e)** If all drivers decelerate and accelerate in the same way as Paul, suggest a maximum distance between bumps to ensure that drivers do not exceed a speed of 14ms^{-1} when driving down the road. [1]

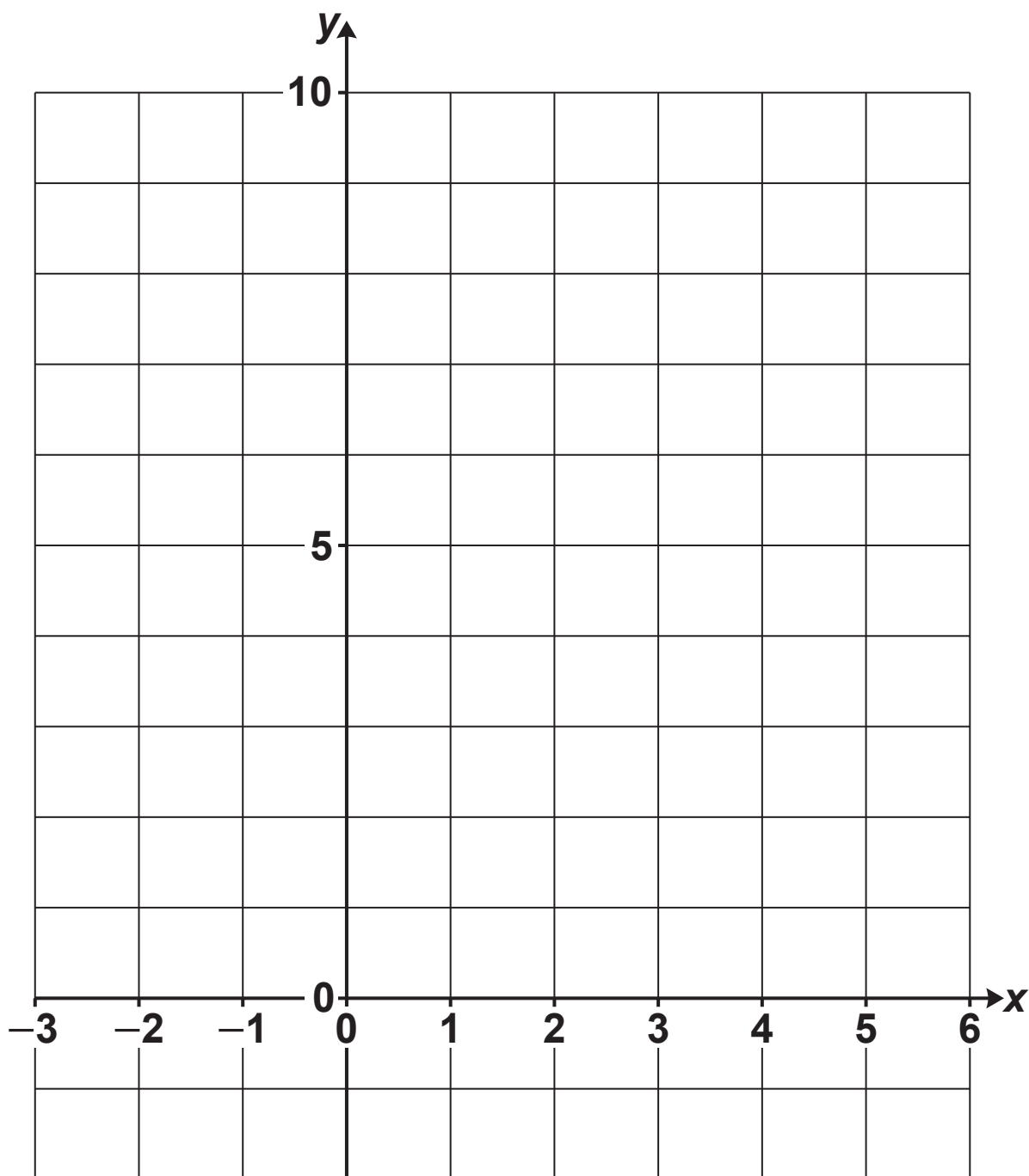
[illegible]

[illegible]

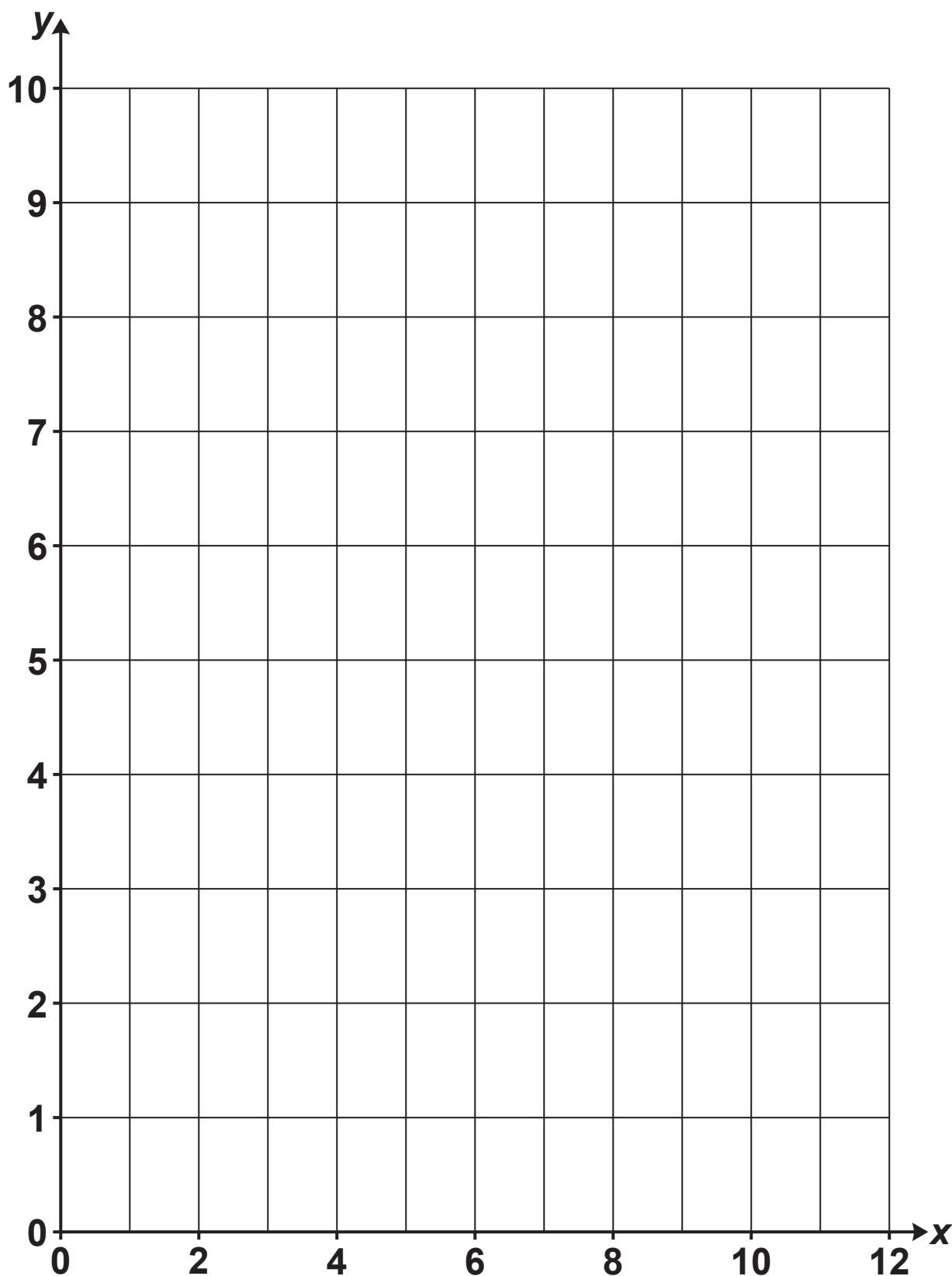
14 (d)

14 (e)

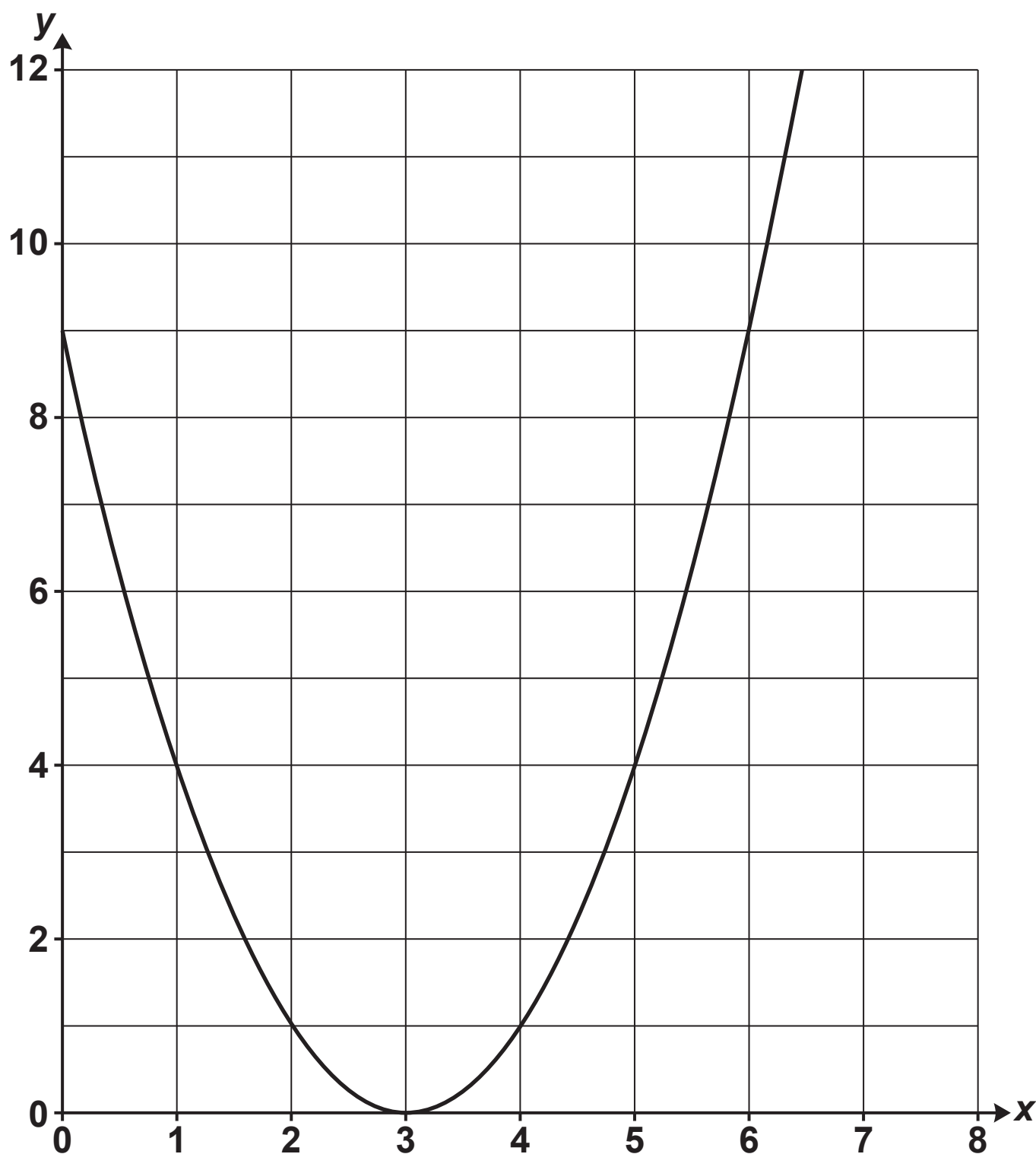
- 4 (a) This is a spare copy of the grid for question 4(a). Only write on this page if you want to offer a second attempt. If you do so, then you must cross through the first attempt on page 8.



- 11 (c) This is a spare copy of the grid for question 11(c). Only write on this page if you want to offer a second attempt. If you do so, then you must cross through the first attempt on page 24.**



12 (c) This is a spare copy of the graph for question 12(c). Only write on this page if you want to offer a second attempt. If you do so, then you must cross through the first attempt on page 28.



END OF QUESTION PAPER



Copyright Information

OCR is committed to seeking permission to reproduce all third-party content that it uses in its assessment materials. OCR has attempted to identify and contact all copyright holders whose work is used in this paper. To avoid the issue of disclosure of answer-related information to candidates, all copyright acknowledgements are reproduced in the OCR Copyright Acknowledgements Booklet. This is produced for each series of examinations and is freely available to download from our public website (www.ocr.org.uk) after the live examination series.

If OCR has unwittingly failed to correctly acknowledge or clear any third-party content in this assessment material, OCR will be happy to correct its mistake at the earliest possible opportunity.

For queries or further information please contact The OCR Copyright Team, The Triangle Building, Shaftesbury Road, Cambridge CB2 8EA.

OCR is part of the Cambridge Assessment Group; Cambridge Assessment is the brand name of University of Cambridge Local Examinations Syndicate (UCLES), which is itself a department of the University of Cambridge.