

Which shape is the same but facing the opposite direction? Select one letter each time and mark it on the answer sheet.

Look at this example.



A

B

C

D

Example

A

B

C

D

1



A



B

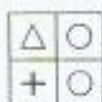
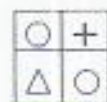


C

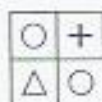


D

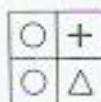
2



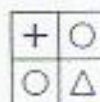
A



B



C



D

3



A



B

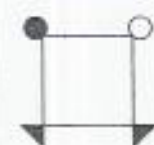


C

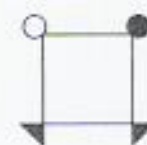


D

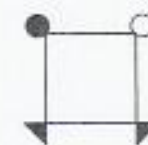
4



A



B



C



D

5



A



B



C



D

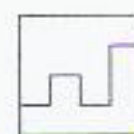
6



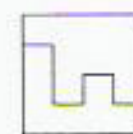
A



B



C



D

7



A



B

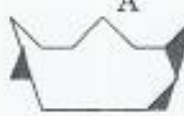


C



D

8



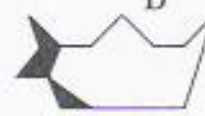
A



B



C



D