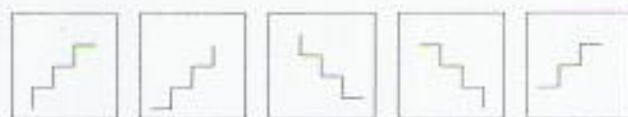


Section 3

The patterns below make a sequence. One pattern is missing. Which pattern completes the sequence?

Example



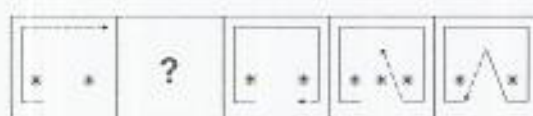
a b c d e

Practice 1



a b c d e

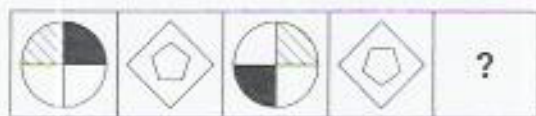
Practice 2



a b c d e

WAIT UNTIL YOU ARE TOLD TO GO ON

1



a b c d e

2



a b c d e

3



a b c d e

CONTINUE TO THE NEXT PAGE